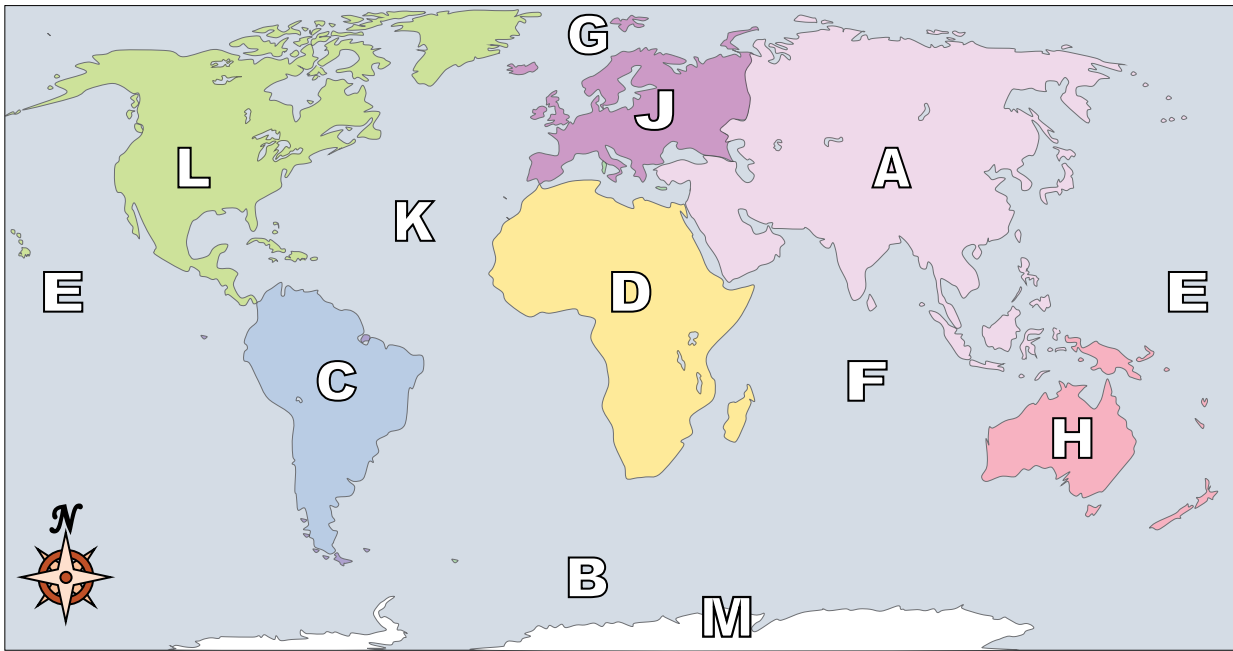




Using the map below, determine which letter represents each continent or ocean.

Answers



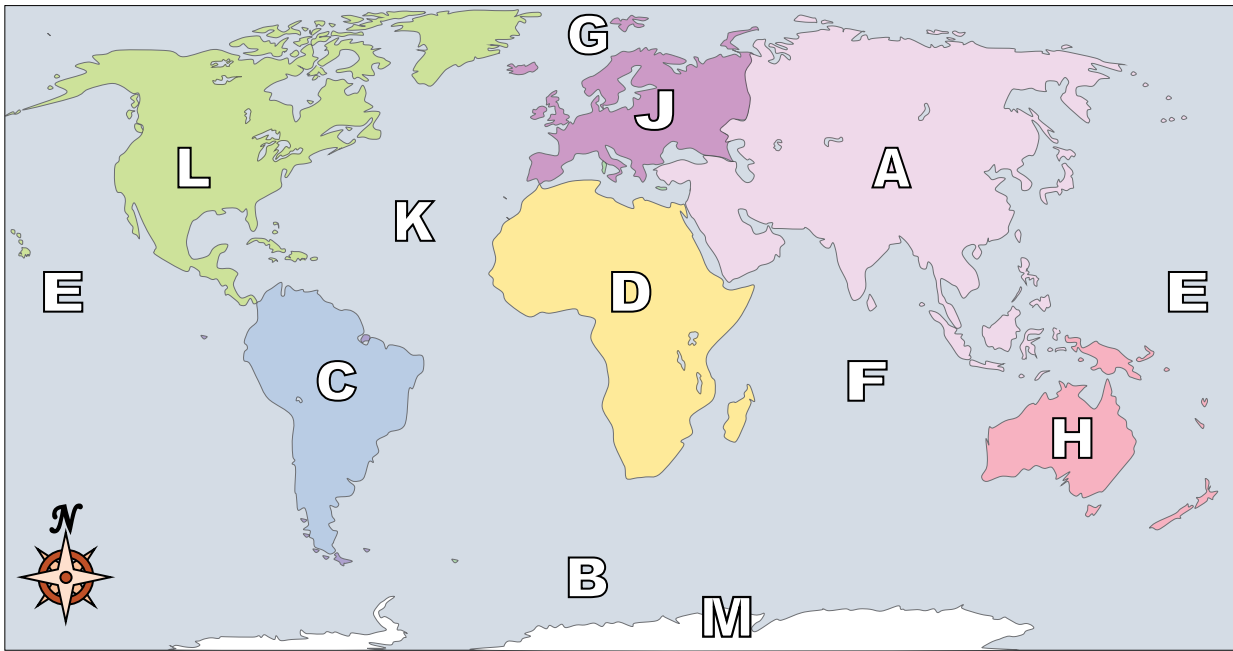
1. _____
2. _____
3. _____
4. _____
5. _____
6. _____
7. _____
8. _____
9. _____
10. _____
11. _____
12. _____
13. _____
14. _____
15. _____
16. _____
17. _____

- | | |
|------------------------|--------------------------|
| 1) North America _____ | 8) Pacific Ocean _____ |
| 2) South America _____ | 9) Atlantic Ocean _____ |
| 3) Europe _____ | 10) Indian Ocean _____ |
| 4) Asia _____ | 11) Arctic Ocean _____ |
| 5) Africa _____ | 12) Southern Ocean _____ |
| 6) Australia _____ | |
| 7) Antarctica _____ | |

- 13) Which of these continents is closest to Africa?
 A. Antarctica C. Europe
 B. North America D. Australia
- 14) Which continent is not touching any other continents?
 A. Asia C. Africa
 B. Antarctica D. North America
- 15) Which continent is touching the eastern border of Europe?
 A. North America C. Africa
 B. Australia D. Asia
- 16) Which ocean touches Africa's western border?
 A. Arctic Ocean C. Indian Ocean
 B. Pacific Ocean D. Atlantic Ocean
- 17) Which ocean touches Africa's eastern border?
 A. Atlantic Ocean C. Pacific Ocean
 B. Indian Ocean D. Arctic Ocean



Using the map below, determine which letter represents each continent or ocean.



- | | | | |
|------------------|----------|--------------------|----------|
| 1) North America | <u>L</u> | 8) Pacific Ocean | <u>E</u> |
| 2) South America | <u>C</u> | 9) Atlantic Ocean | <u>K</u> |
| 3) Europe | <u>J</u> | 10) Indian Ocean | <u>F</u> |
| 4) Asia | <u>A</u> | 11) Arctic Ocean | <u>G</u> |
| 5) Africa | <u>D</u> | 12) Southern Ocean | <u>B</u> |
| 6) Australia | <u>H</u> | | |
| 7) Antarctica | <u>M</u> | | |

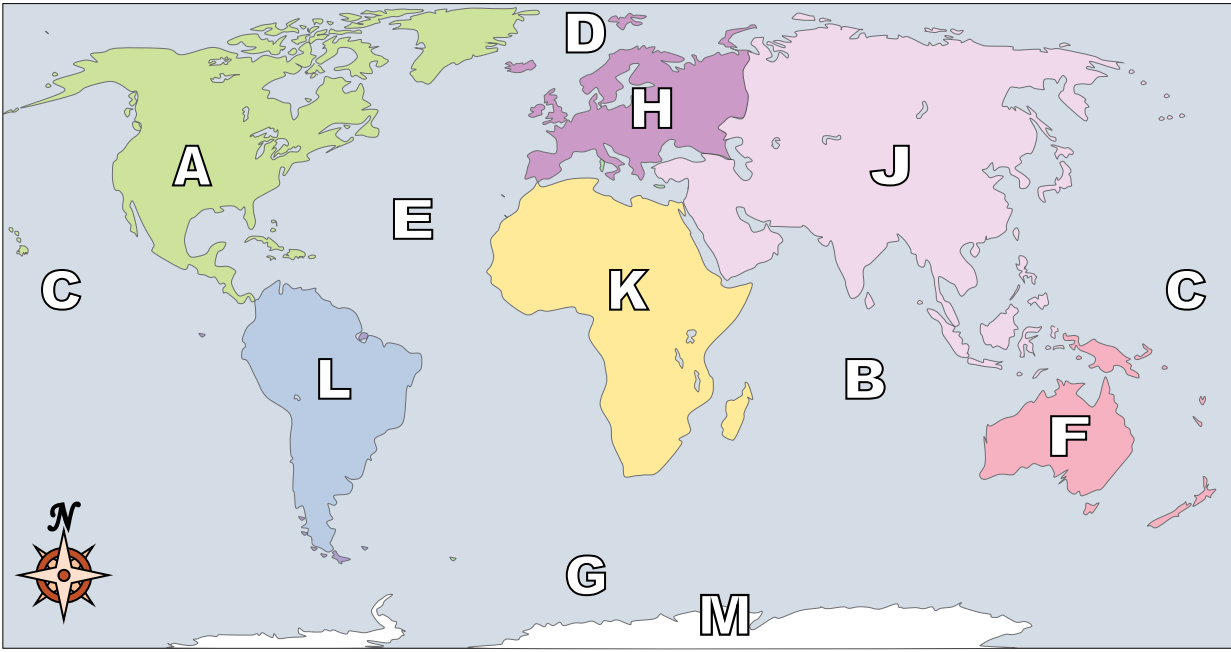
- 13) Which of these continents is closest to Africa?
 A. Antarctica C. Europe
 B. North America D. Australia
- 14) Which continent is not touching any other continents?
 A. Asia C. Africa
 B. Antarctica D. North America
- 15) Which continent is touching the eastern border of Europe?
 A. North America C. Africa
 B. Australia D. Asia
- 16) Which ocean touches Africa's western border?
 A. Arctic Ocean C. Indian Ocean
 B. Pacific Ocean D. Atlantic Ocean
- 17) Which ocean touches Africa's eastern border?
 A. Atlantic Ocean C. Pacific Ocean
 B. Indian Ocean D. Arctic Ocean

Answers

1. L
2. C
3. J
4. A
5. D
6. H
7. M
8. E
9. K
10. F
11. G
12. B
13. C
14. B
15. D
16. D
17. B



Using the map below, determine which letter represents each continent or ocean.



Answers

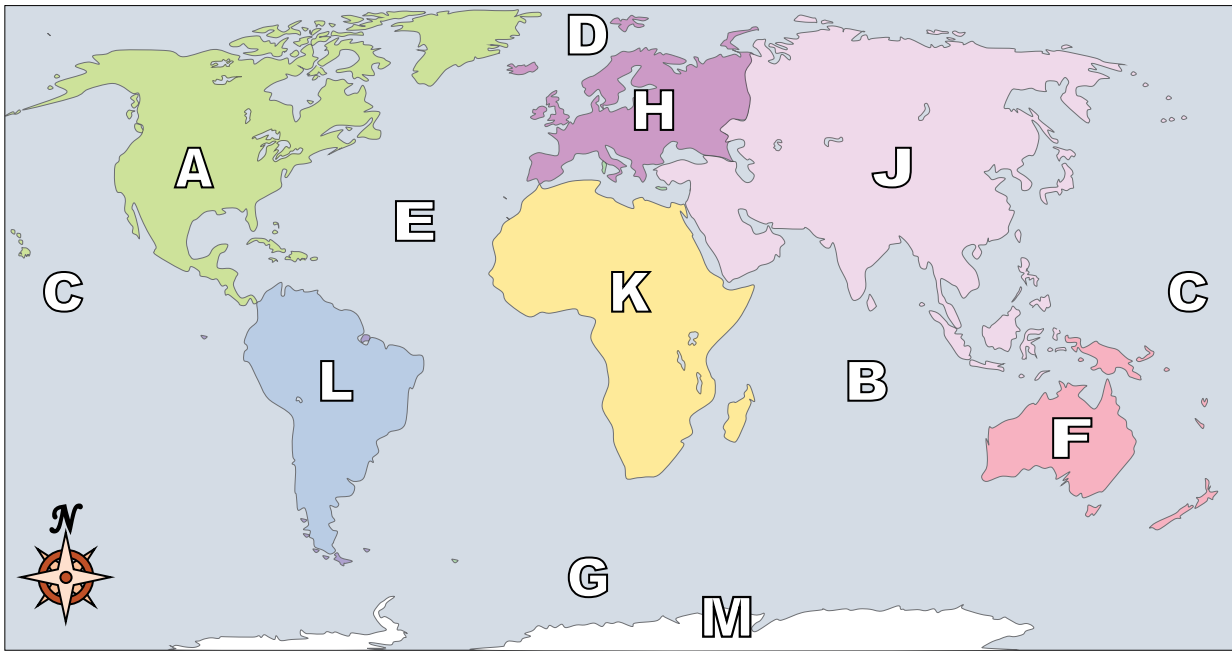
1. _____
2. _____
3. _____
4. _____
5. _____
6. _____
7. _____
8. _____
9. _____
10. _____
11. _____
12. _____
13. _____
14. _____
15. _____
16. _____
17. _____

- | | |
|------------------------|--------------------------|
| 1) North America _____ | 8) Pacific Ocean _____ |
| 2) South America _____ | 9) Atlantic Ocean _____ |
| 3) Europe _____ | 10) Indian Ocean _____ |
| 4) Asia _____ | 11) Arctic Ocean _____ |
| 5) Africa _____ | 12) Southern Ocean _____ |
| 6) Australia _____ | |
| 7) Antarctica _____ | |

- 13) If you were in Europe and went south which continent would you end up in?
 A. North America C. Asia
 B. Africa D. South America
- 14) Which continent is not touching any other continents?
 A. Antarctica C. North America
 B. Africa D. Europe
- 15) Which ocean touches Africa's western border?
 A. Pacific Ocean C. Indian Ocean
 B. Arctic Ocean D. Atlantic Ocean
- 16) Which continent is touching the eastern border of Europe?
 A. Africa C. Asia
 B. South America D. Australia
- 17) Which ocean touches South America's western border?
 A. Indian Ocean C. Atlantic Ocean
 B. Pacific Ocean D. Arctic Ocean



Using the map below, determine which letter represents each continent or ocean.



- | | | | |
|------------------|----------|--------------------|----------|
| 1) North America | <u>A</u> | 8) Pacific Ocean | <u>C</u> |
| 2) South America | <u>L</u> | 9) Atlantic Ocean | <u>E</u> |
| 3) Europe | <u>H</u> | 10) Indian Ocean | <u>B</u> |
| 4) Asia | <u>J</u> | 11) Arctic Ocean | <u>D</u> |
| 5) Africa | <u>K</u> | 12) Southern Ocean | <u>G</u> |
| 6) Australia | <u>F</u> | | |
| 7) Antarctica | <u>M</u> | | |

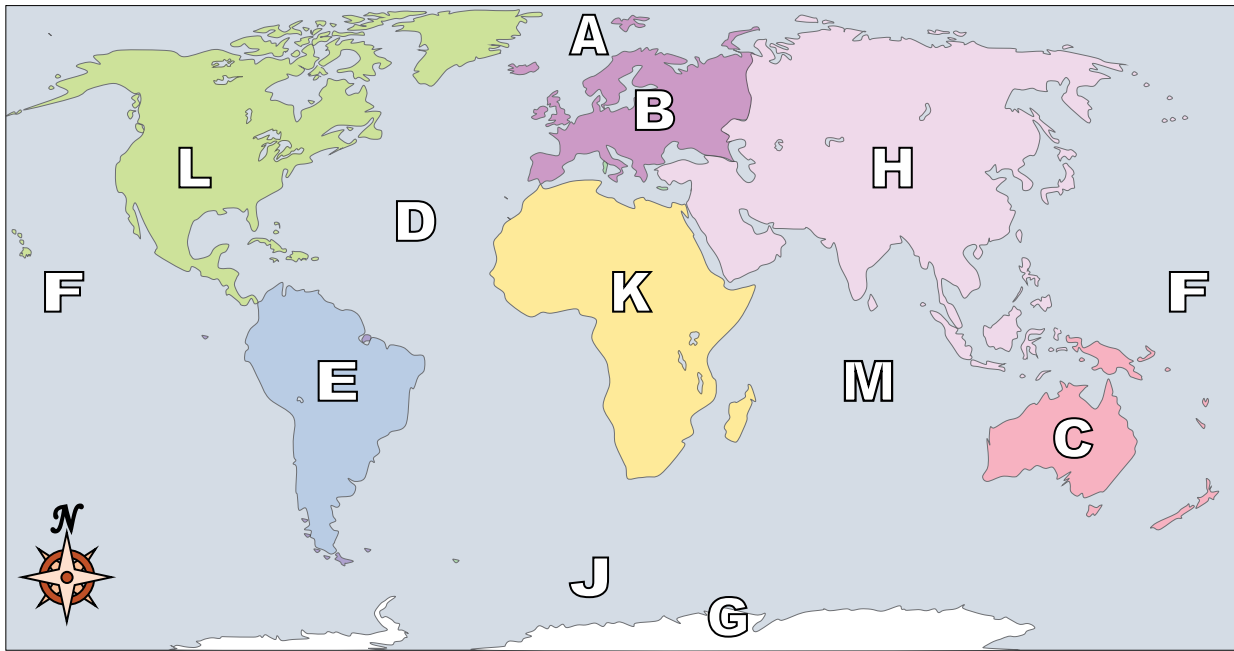
- 13) If you were in Europe and went south which continent would you end up in?
 A. North America C. Asia
 B. Africa D. South America
- 14) Which continent is not touching any other continents?
 A. Antarctica C. North America
 B. Africa D. Europe
- 15) Which ocean touches Africa's western border?
 A. Pacific Ocean C. Indian Ocean
 B. Arctic Ocean D. Atlantic Ocean
- 16) Which continent is touching the eastern border of Europe?
 A. Africa C. Asia
 B. South America D. Australia
- 17) Which ocean touches South America's western border?
 A. Indian Ocean C. Atlantic Ocean
 B. Pacific Ocean D. Arctic Ocean

Answers

1. A
2. L
3. H
4. J
5. K
6. F
7. M
8. C
9. E
10. B
11. D
12. G
13. B
14. A
15. D
16. C
17. B



Using the map below, determine which letter represents each continent or ocean.



Answers

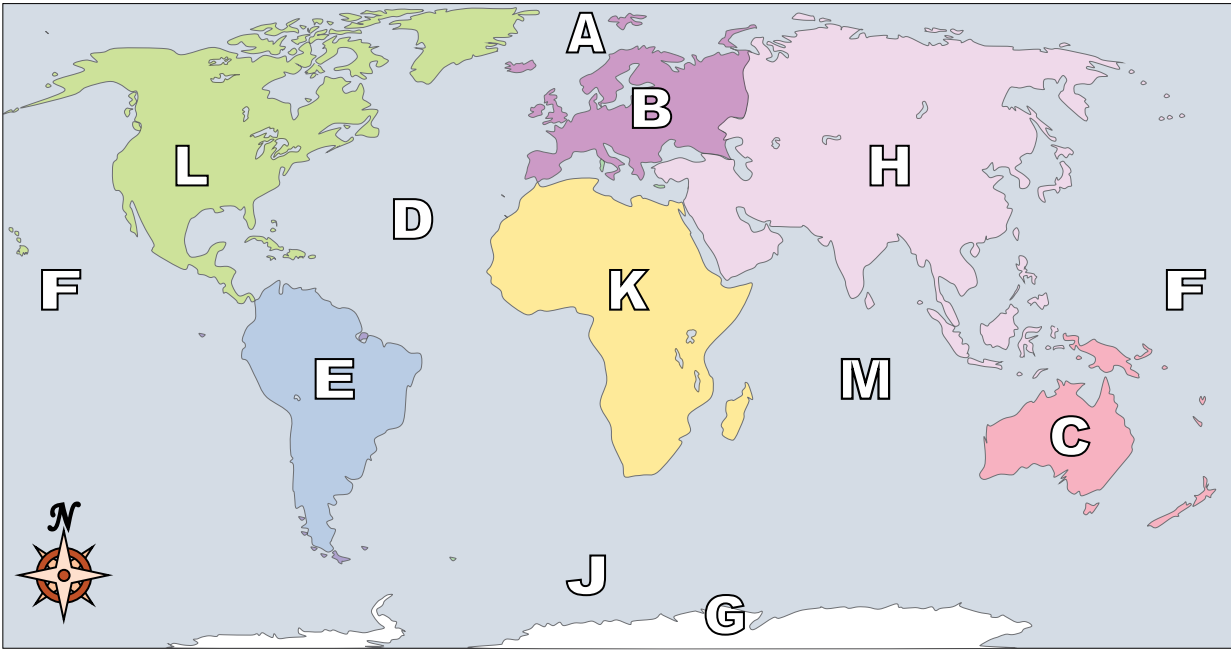
1. _____
2. _____
3. _____
4. _____
5. _____
6. _____
7. _____
8. _____
9. _____
10. _____
11. _____
12. _____
13. _____
14. _____
15. _____
16. _____
17. _____

- | | |
|------------------------|--------------------------|
| 1) North America _____ | 8) Pacific Ocean _____ |
| 2) South America _____ | 9) Atlantic Ocean _____ |
| 3) Europe _____ | 10) Indian Ocean _____ |
| 4) Asia _____ | 11) Arctic Ocean _____ |
| 5) Africa _____ | 12) Southern Ocean _____ |
| 6) Australia _____ | |
| 7) Antarctica _____ | |

- 13) Which of these continents is closest to Europe?
 A. South America C. Antarctica
 B. Australia D. Africa
- 14) If you were in South America and flew east to Australia which continent would you fly over?
 A. Europe C. North America
 B. Africa D. Antarctica
- 15) Which ocean touches South America's eastern border?
 A. Arctic Ocean C. Pacific Ocean
 B. Atlantic Ocean D. Indian Ocean
- 16) If you were in Europe and went south which continent would you end up in?
 A. Africa C. North America
 B. Australia D. South America
- 17) Which continent is not touching any other continents?
 A. Antarctica C. Africa
 B. Asia D. South America



Using the map below, determine which letter represents each continent or ocean.



- | | | | |
|------------------|----------|--------------------|----------|
| 1) North America | <u>L</u> | 8) Pacific Ocean | <u>F</u> |
| 2) South America | <u>E</u> | 9) Atlantic Ocean | <u>D</u> |
| 3) Europe | <u>B</u> | 10) Indian Ocean | <u>M</u> |
| 4) Asia | <u>H</u> | 11) Arctic Ocean | <u>A</u> |
| 5) Africa | <u>K</u> | 12) Southern Ocean | <u>J</u> |
| 6) Australia | <u>C</u> | | |
| 7) Antarctica | <u>G</u> | | |

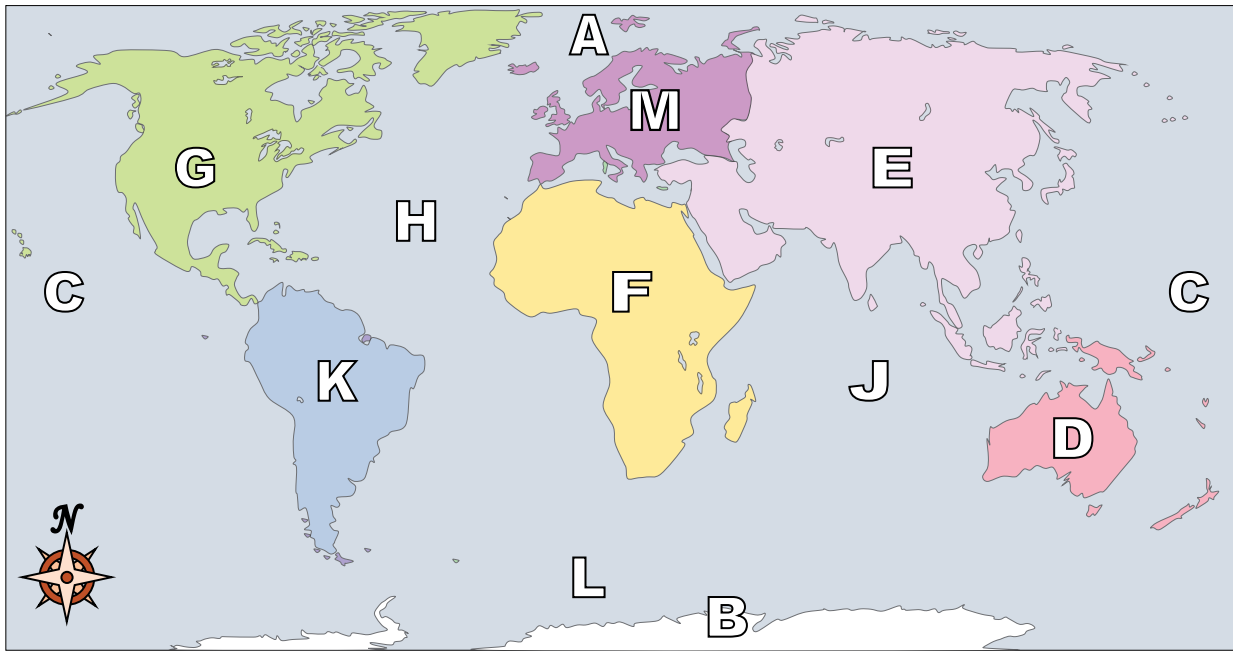
- 13) Which of these continents is closest to Europe?
 A. South America C. Antarctica
 B. Australia D. Africa
- 14) If you were in South America and flew east to Australia which continent would you fly over?
 A. Europe C. North America
 B. Africa D. Antarctica
- 15) Which ocean touches South America's eastern border?
 A. Arctic Ocean C. Pacific Ocean
 B. Atlantic Ocean D. Indian Ocean
- 16) If you were in Europe and went south which continent would you end up in?
 A. Africa C. North America
 B. Australia D. South America
- 17) Which continent is not touching any other continents?
 A. Antarctica C. Africa
 B. Asia D. South America

Answers

1. L
2. E
3. B
4. H
5. K
6. C
7. G
8. F
9. D
10. M
11. A
12. J
13. D
14. B
15. B
16. A
17. A



Using the map below, determine which letter represents each continent or ocean.



Answers

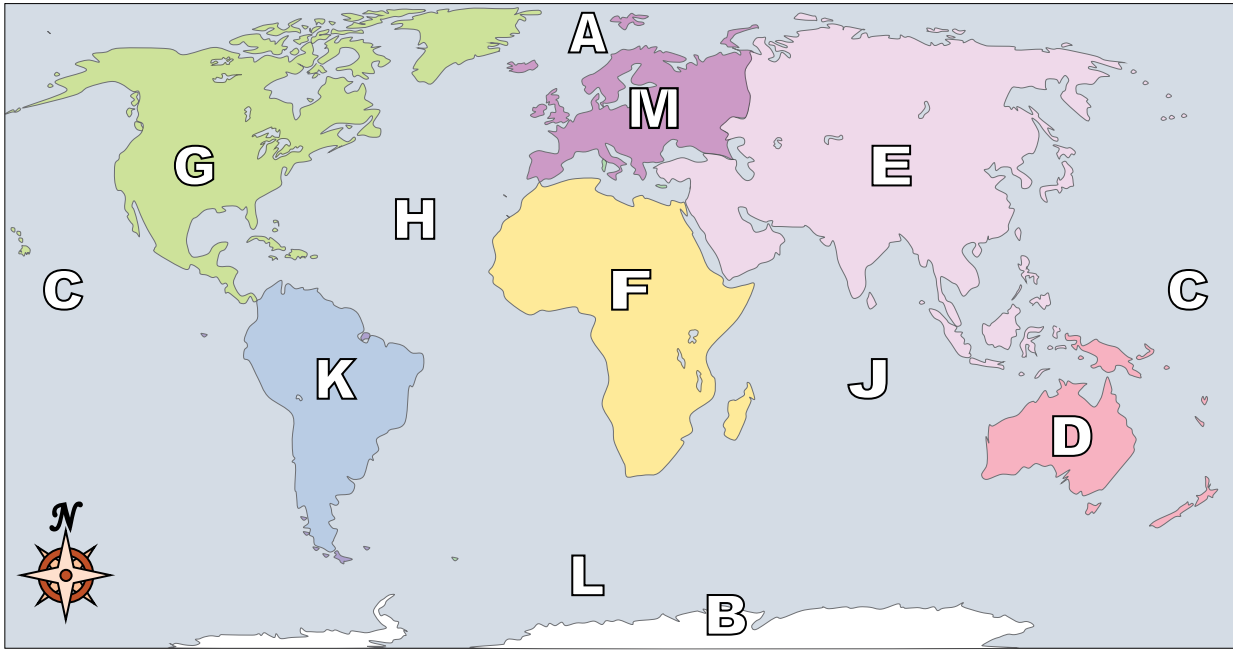
1. _____
2. _____
3. _____
4. _____
5. _____
6. _____
7. _____
8. _____
9. _____
10. _____
11. _____
12. _____
13. _____
14. _____
15. _____
16. _____
17. _____

- | | |
|------------------------|--------------------------|
| 1) North America _____ | 8) Pacific Ocean _____ |
| 2) South America _____ | 9) Atlantic Ocean _____ |
| 3) Europe _____ | 10) Indian Ocean _____ |
| 4) Asia _____ | 11) Arctic Ocean _____ |
| 5) Africa _____ | 12) Southern Ocean _____ |
| 6) Australia _____ | |
| 7) Antarctica _____ | |

- 13) Which ocean touches Africa's eastern border?
 A. Atlantic Ocean C. Pacific Ocean
 B. Arctic Ocean D. Indian Ocean
- 14) If you were in Africa and went south which continent would you end up in?
 A. Asia C. Australia
 B. Antarctica D. North America
- 15) Which continent is touching the eastern border of Europe?
 A. North America C. South America
 B. Asia D. Africa
- 16) Which continent is not touching any other continents?
 A. North America C. Europe
 B. Australia D. Asia
- 17) Which of these continents is closest to Africa?
 A. Australia C. Asia
 B. Antarctica D. South America



Using the map below, determine which letter represents each continent or ocean.



- | | | | |
|------------------|--------------|--------------------|--------------|
| 1) North America | <u> G </u> | 8) Pacific Ocean | <u> C </u> |
| 2) South America | <u> K </u> | 9) Atlantic Ocean | <u> H </u> |
| 3) Europe | <u> M </u> | 10) Indian Ocean | <u> J </u> |
| 4) Asia | <u> E </u> | 11) Arctic Ocean | <u> A </u> |
| 5) Africa | <u> F </u> | 12) Southern Ocean | <u> L </u> |
| 6) Australia | <u> D </u> | | |
| 7) Antarctica | <u> B </u> | | |

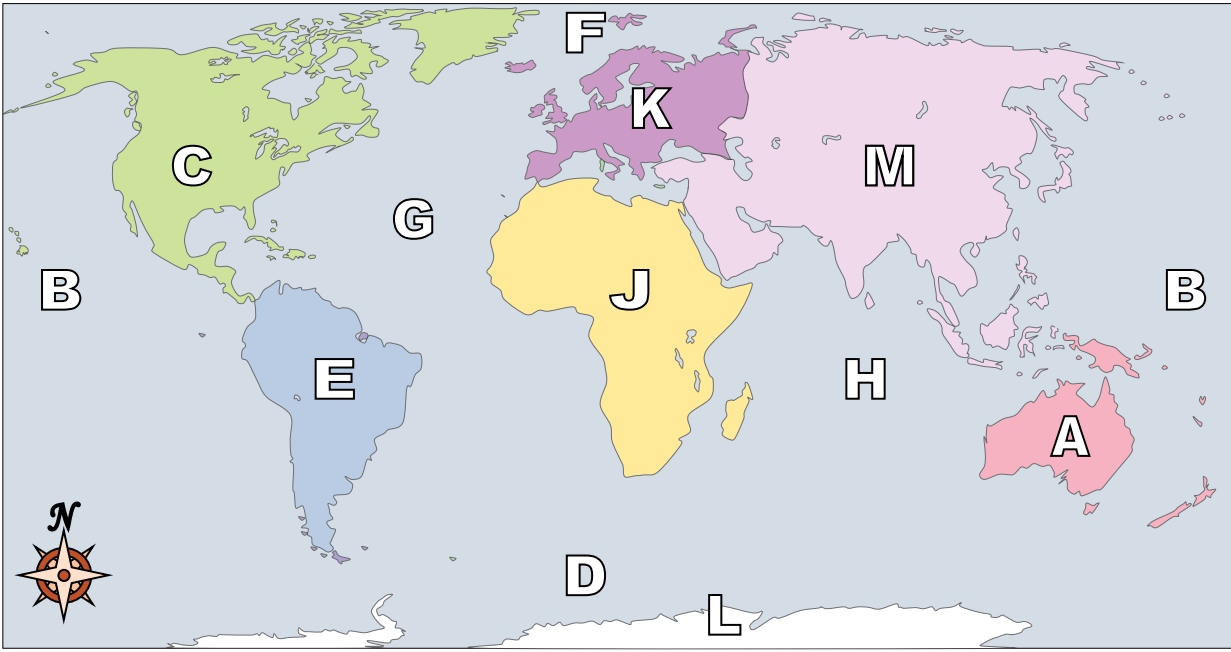
- 13) Which ocean touches Africa's eastern border?
 A. Atlantic Ocean C. Pacific Ocean
 B. Arctic Ocean D. Indian Ocean
- 14) If you were in Africa and went south which continent would you end up in?
 A. Asia C. Australia
 B. Antarctica D. North America
- 15) Which continent is touching the eastern border of Europe?
 A. North America C. South America
 B. Asia D. Africa
- 16) Which continent is not touching any other continents?
 A. North America C. Europe
 B. Australia D. Asia
- 17) Which of these continents is closest to Africa?
 A. Australia C. Asia
 B. Antarctica D. South America

Answers

1. G
2. K
3. M
4. E
5. F
6. D
7. B
8. C
9. H
10. J
11. A
12. L
13. D
14. B
15. B
16. B
17. C



Using the map below, determine which letter represents each continent or ocean.



Answers

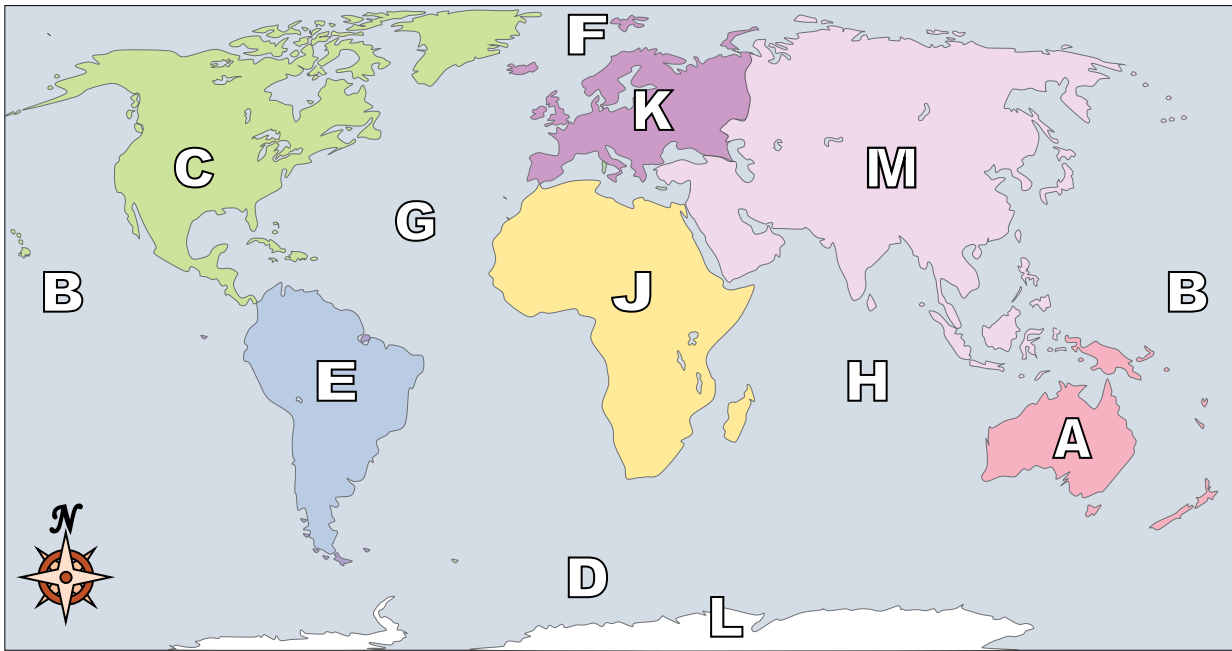
1. _____
2. _____
3. _____
4. _____
5. _____
6. _____
7. _____
8. _____
9. _____
10. _____
11. _____
12. _____
13. _____
14. _____
15. _____
16. _____
17. _____

- | | |
|------------------------|--------------------------|
| 1) North America _____ | 8) Pacific Ocean _____ |
| 2) South America _____ | 9) Atlantic Ocean _____ |
| 3) Europe _____ | 10) Indian Ocean _____ |
| 4) Asia _____ | 11) Arctic Ocean _____ |
| 5) Africa _____ | 12) Southern Ocean _____ |
| 6) Australia _____ | |
| 7) Antarctica _____ | |

- 13) Which continent is not touching any other continents?
 A. North America C. Antarctica
 B. Europe D. South America
- 14) Which of these continents is closest to Africa?
 A. Antarctica C. Europe
 B. North America D. South America
- 15) If you were in South America and flew east to Australia which continent would you fly over?
 A. Asia C. North America
 B. Europe D. Africa
- 16) Which ocean touches Africa's eastern border?
 A. Pacific Ocean C. Atlantic Ocean
 B. Arctic Ocean D. Indian Ocean
- 17) Which of these continents is closest to Europe?
 A. North America C. Africa
 B. Antarctica D. Australia



Using the map below, determine which letter represents each continent or ocean.



- | | | | |
|------------------|----------|--------------------|----------|
| 1) North America | <u>C</u> | 8) Pacific Ocean | <u>B</u> |
| 2) South America | <u>E</u> | 9) Atlantic Ocean | <u>G</u> |
| 3) Europe | <u>K</u> | 10) Indian Ocean | <u>H</u> |
| 4) Asia | <u>M</u> | 11) Arctic Ocean | <u>F</u> |
| 5) Africa | <u>J</u> | 12) Southern Ocean | <u>D</u> |
| 6) Australia | <u>A</u> | | |
| 7) Antarctica | <u>L</u> | | |

- 13) Which continent is not touching any other continents?
 A. North America C. Antarctica
 B. Europe D. South America
- 14) Which of these continents is closest to Africa?
 A. Antarctica C. Europe
 B. North America D. South America
- 15) If you were in South America and flew east to Australia which continent would you fly over?
 A. Asia C. North America
 B. Europe D. Africa
- 16) Which ocean touches Africa's eastern border?
 A. Pacific Ocean C. Atlantic Ocean
 B. Arctic Ocean D. Indian Ocean
- 17) Which of these continents is closest to Europe?
 A. North America C. Africa
 B. Antarctica D. Australia

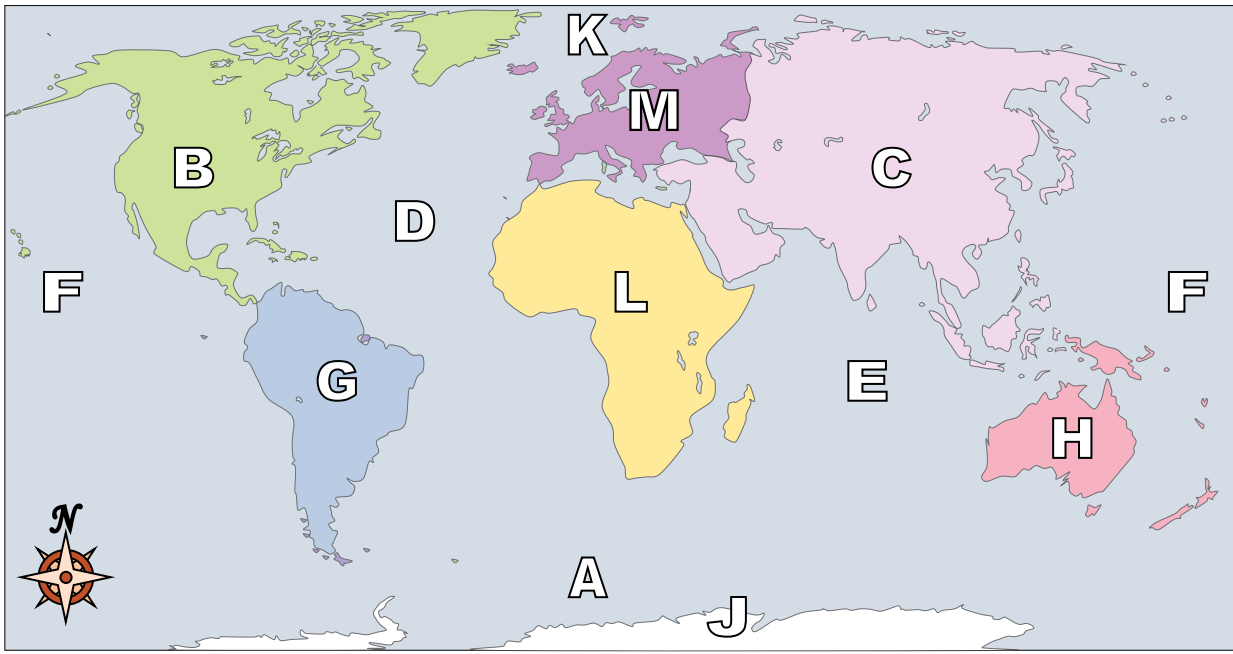
Answers

1. C
2. E
3. K
4. M
5. J
6. A
7. L
8. B
9. G
10. H
11. F
12. D
13. C
14. C
15. D
16. D
17. C



Using the map below, determine which letter represents each continent or ocean.

Answers



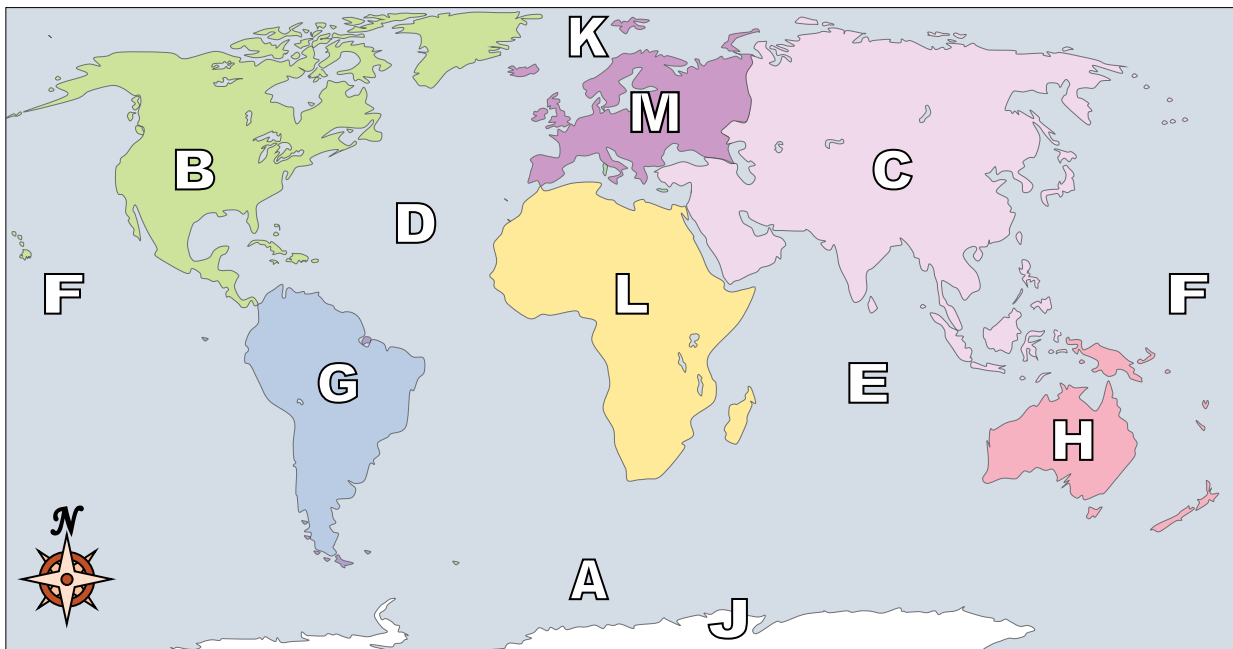
1. _____
2. _____
3. _____
4. _____
5. _____
6. _____
7. _____
8. _____
9. _____
10. _____
11. _____
12. _____
13. _____
14. _____
15. _____
16. _____
17. _____

- | | |
|------------------------|--------------------------|
| 1) North America _____ | 8) Pacific Ocean _____ |
| 2) South America _____ | 9) Atlantic Ocean _____ |
| 3) Europe _____ | 10) Indian Ocean _____ |
| 4) Asia _____ | 11) Arctic Ocean _____ |
| 5) Africa _____ | 12) Southern Ocean _____ |
| 6) Australia _____ | |
| 7) Antarctica _____ | |

- 13) Which ocean touches Africa's western border?
 A. Atlantic Ocean C. Indian Ocean
 B. Arctic Ocean D. Pacific Ocean
- 14) Which continent is touching the eastern border of Europe?
 A. Asia C. Africa
 B. Australia D. North America
- 15) If you were in Europe and went south which continent would you end up in?
 A. South America C. Africa
 B. Australia D. North America
- 16) If you were in North America and went west which continent would you end up in?
 A. Africa C. Australia
 B. Asia D. South America
- 17) If you were in South America and flew east to Australia which continent would you fly over?
 A. North America C. Europe
 B. Africa D. Asia



Using the map below, determine which letter represents each continent or ocean.



- 1) North America B
- 2) South America G
- 3) Europe M
- 4) Asia C
- 5) Africa L
- 6) Australia H
- 7) Antarctica J
- 8) Pacific Ocean F
- 9) Atlantic Ocean D
- 10) Indian Ocean E
- 11) Arctic Ocean K
- 12) Southern Ocean A

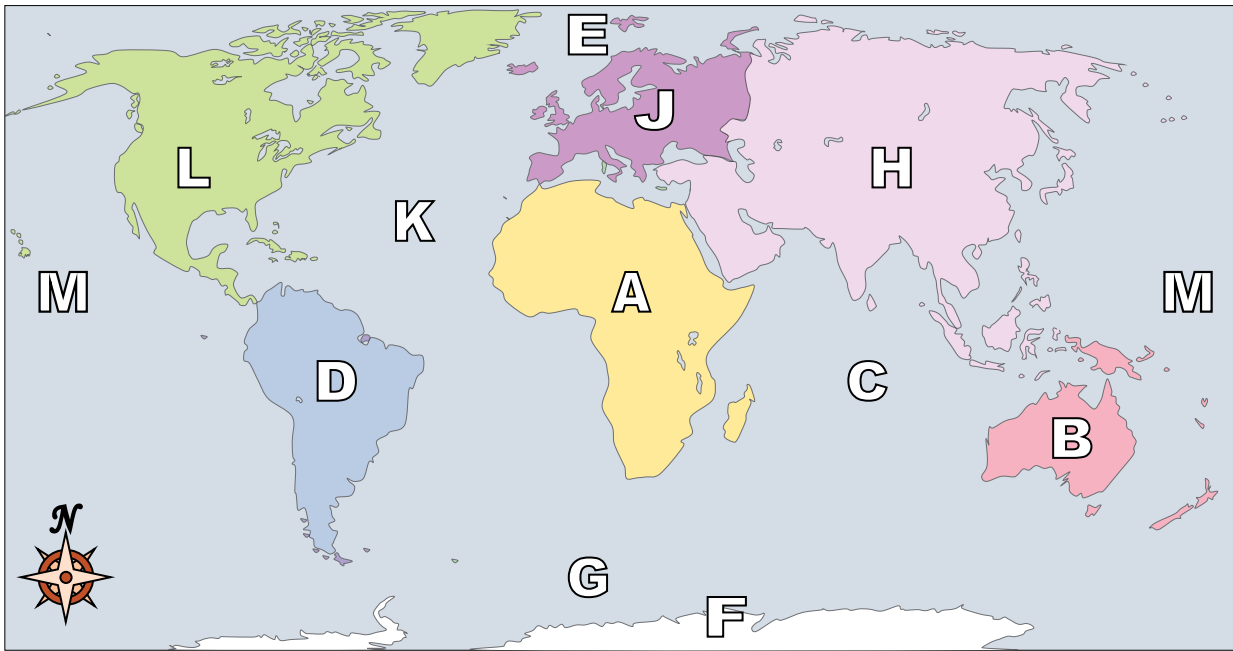
- 13) Which ocean touches Africa's western border?
 - A. Atlantic Ocean
 - B. Arctic Ocean
 - C. Indian Ocean
 - D. Pacific Ocean
- 14) Which continent is touching the eastern border of Europe?
 - A. Asia
 - B. Australia
 - C. Africa
 - D. North America
- 15) If you were in Europe and went south which continent would you end up in?
 - A. South America
 - B. Australia
 - C. Africa
 - D. North America
- 16) If you were in North America and went west which continent would you end up in?
 - A. Africa
 - B. Asia
 - C. Australia
 - D. South America
- 17) If you were in South America and flew east to Australia which continent would you fly over?
 - A. North America
 - B. Africa
 - C. Europe
 - D. Asia

Answers

- 1. B
- 2. G
- 3. M
- 4. C
- 5. L
- 6. H
- 7. J
- 8. F
- 9. D
- 10. E
- 11. K
- 12. A
- 13. A
- 14. A
- 15. C
- 16. B
- 17. B



Using the map below, determine which letter represents each continent or ocean.



Answers

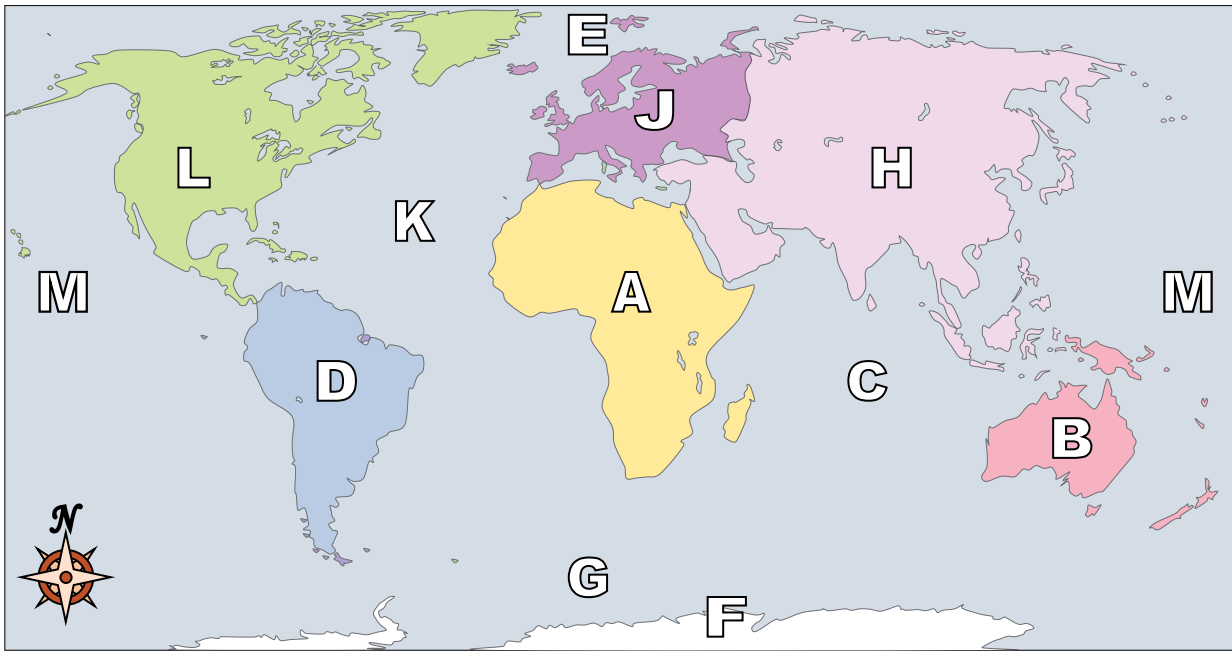
1. _____
2. _____
3. _____
4. _____
5. _____
6. _____
7. _____
8. _____
9. _____
10. _____
11. _____
12. _____
13. _____
14. _____
15. _____
16. _____
17. _____

- | | |
|------------------------|--------------------------|
| 1) North America _____ | 8) Pacific Ocean _____ |
| 2) South America _____ | 9) Atlantic Ocean _____ |
| 3) Europe _____ | 10) Indian Ocean _____ |
| 4) Asia _____ | 11) Arctic Ocean _____ |
| 5) Africa _____ | 12) Southern Ocean _____ |
| 6) Australia _____ | |
| 7) Antarctica _____ | |

- 13) Which ocean touches South America's eastern border?
 A. Indian Ocean C. Arctic Ocean
 B. Pacific Ocean D. Atlantic Ocean
- 14) If you were in Africa and went south which continent would you end up in?
 A. Antarctica C. South America
 B. Australia D. North America
- 15) Which continent is furthest south?
 A. Asia C. Antarctica
 B. North America D. Australia
- 16) If you were in Europe and went east which continent would you end up in?
 A. North America C. Asia
 B. Africa D. Australia
- 17) Which continent is touching the eastern border of Europe?
 A. Asia C. North America
 B. Antarctica D. Australia



Using the map below, determine which letter represents each continent or ocean.



- | | | | |
|------------------|----------|--------------------|----------|
| 1) North America | <u>L</u> | 8) Pacific Ocean | <u>M</u> |
| 2) South America | <u>D</u> | 9) Atlantic Ocean | <u>K</u> |
| 3) Europe | <u>J</u> | 10) Indian Ocean | <u>C</u> |
| 4) Asia | <u>H</u> | 11) Arctic Ocean | <u>E</u> |
| 5) Africa | <u>A</u> | 12) Southern Ocean | <u>G</u> |
| 6) Australia | <u>B</u> | | |
| 7) Antarctica | <u>F</u> | | |

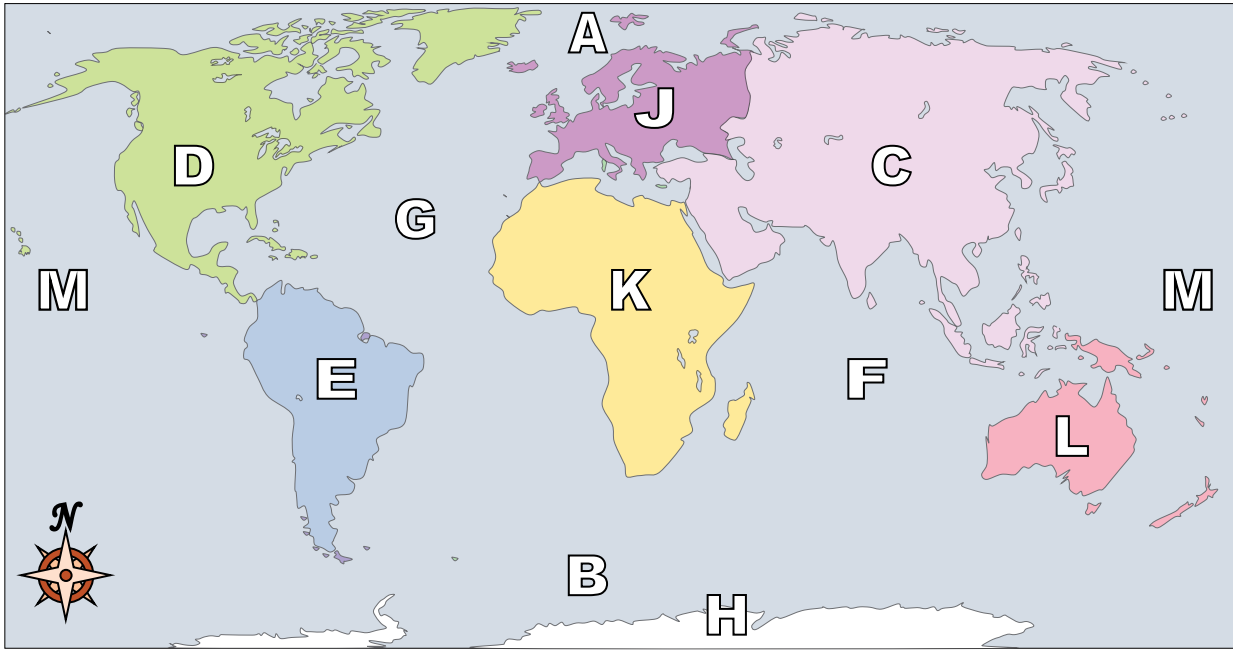
- 13) Which ocean touches South America's eastern border?
 A. Indian Ocean C. Arctic Ocean
 B. Pacific Ocean D. Atlantic Ocean
- 14) If you were in Africa and went south which continent would you end up in?
 A. Antarctica C. South America
 B. Australia D. North America
- 15) Which continent is furthest south?
 A. Asia C. Antarctica
 B. North America D. Australia
- 16) If you were in Europe and went east which continent would you end up in?
 A. North America C. Asia
 B. Africa D. Australia
- 17) Which continent is touching the eastern border of Europe?
 A. Asia C. North America
 B. Antarctica D. Australia

Answers

1. L
2. D
3. J
4. H
5. A
6. B
7. F
8. M
9. K
10. C
11. E
12. G
13. D
14. A
15. C
16. C
17. A



Using the map below, determine which letter represents each continent or ocean.



Answers

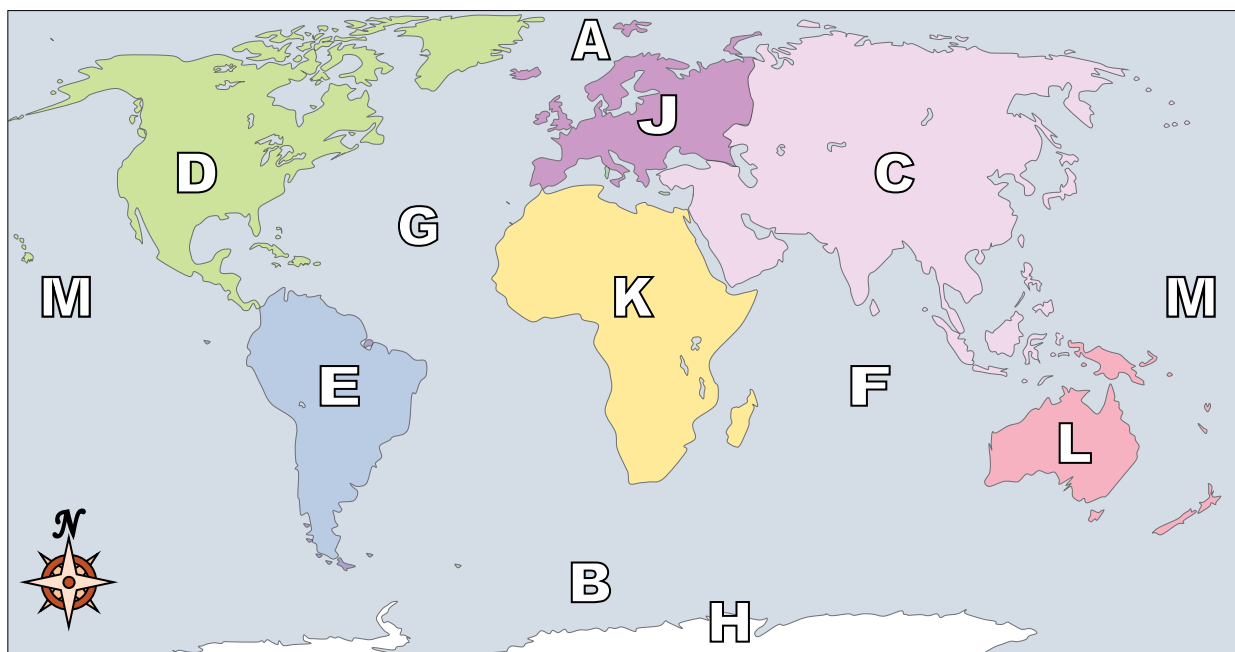
1. _____
2. _____
3. _____
4. _____
5. _____
6. _____
7. _____
8. _____
9. _____
10. _____
11. _____
12. _____
13. _____
14. _____
15. _____
16. _____
17. _____

- | | |
|------------------------|--------------------------|
| 1) North America _____ | 8) Pacific Ocean _____ |
| 2) South America _____ | 9) Atlantic Ocean _____ |
| 3) Europe _____ | 10) Indian Ocean _____ |
| 4) Asia _____ | 11) Arctic Ocean _____ |
| 5) Africa _____ | 12) Southern Ocean _____ |
| 6) Australia _____ | |
| 7) Antarctica _____ | |

- 13) If you were in Europe and went east which continent would you end up in?
 A. North America C. Asia
 B. Antarctica D. Australia
- 14) Which of these continents is closest to Europe?
 A. Antarctica C. Africa
 B. Australia D. South America
- 15) Which ocean touches South America's western border?
 A. Atlantic Ocean C. Pacific Ocean
 B. Indian Ocean D. Arctic Ocean
- 16) Which of these continents is closest to Africa?
 A. Australia C. North America
 B. Europe D. Antarctica
- 17) If you were in Europe and went south which continent would you end up in?
 A. North America C. Australia
 B. Africa D. Asia



Using the map below, determine which letter represents each continent or ocean.



- | | | | |
|------------------|----------|--------------------|----------|
| 1) North America | <u>D</u> | 8) Pacific Ocean | <u>M</u> |
| 2) South America | <u>E</u> | 9) Atlantic Ocean | <u>G</u> |
| 3) Europe | <u>J</u> | 10) Indian Ocean | <u>F</u> |
| 4) Asia | <u>C</u> | 11) Arctic Ocean | <u>A</u> |
| 5) Africa | <u>K</u> | 12) Southern Ocean | <u>B</u> |
| 6) Australia | <u>L</u> | | |
| 7) Antarctica | <u>H</u> | | |

13) If you were in Europe and went east which continent would you end up in?

- | | |
|------------------|--------------|
| A. North America | C. Asia |
| B. Antarctica | D. Australia |

14) Which of these continents is closest to Europe?

- | | |
|---------------|------------------|
| A. Antarctica | C. Africa |
| B. Australia | D. South America |

15) Which ocean touches South America's western border?

- | | |
|-------------------|------------------|
| A. Atlantic Ocean | C. Pacific Ocean |
| B. Indian Ocean | D. Arctic Ocean |

16) Which of these continents is closest to Africa?

- | | |
|--------------|------------------|
| A. Australia | C. North America |
| B. Europe | D. Antarctica |

17) If you were in Europe and went south which continent would you end up in?

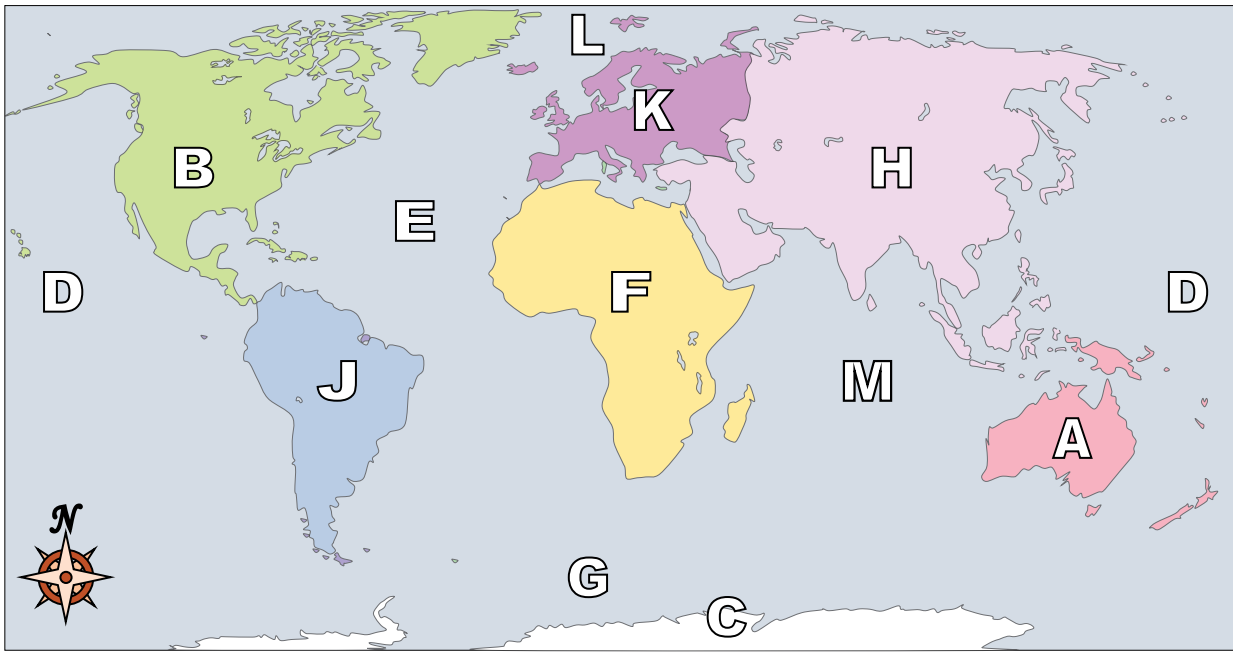
- | | |
|------------------|--------------|
| A. North America | C. Australia |
| B. Africa | D. Asia |

Answers

1. D
2. E
3. J
4. C
5. K
6. L
7. H
8. M
9. G
10. F
11. A
12. B
13. C
14. C
15. C
16. B
17. B



Using the map below, determine which letter represents each continent or ocean.



Answers

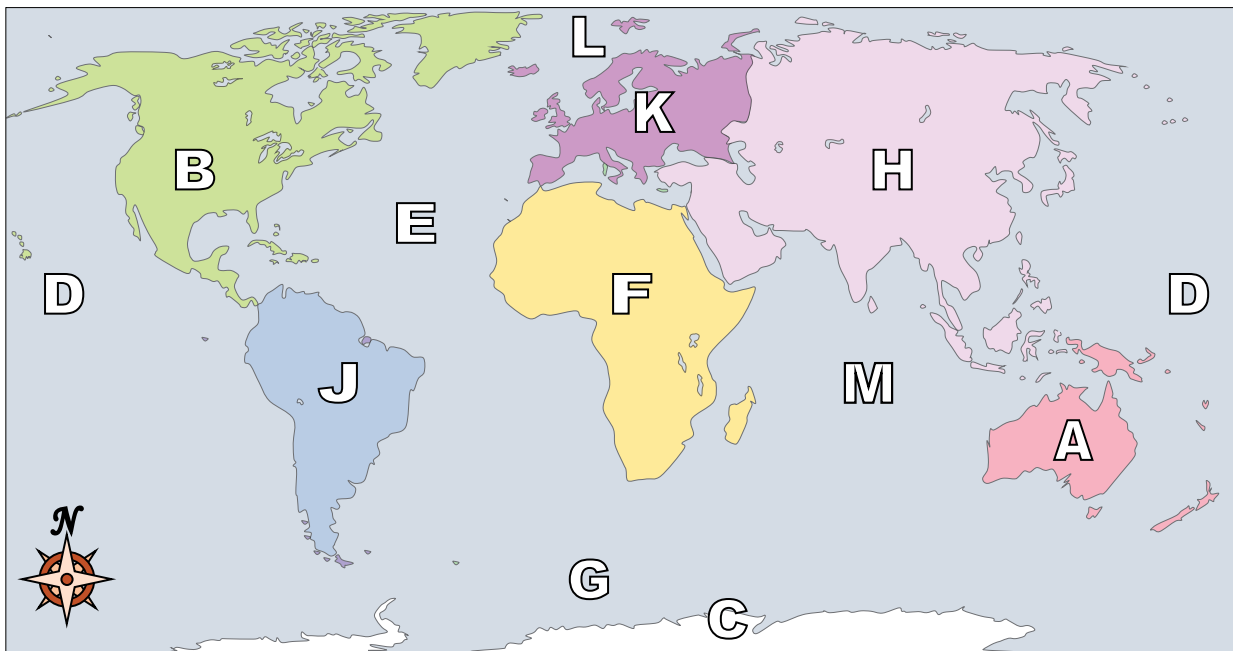
1. _____
2. _____
3. _____
4. _____
5. _____
6. _____
7. _____
8. _____
9. _____
10. _____
11. _____
12. _____
13. _____
14. _____
15. _____
16. _____
17. _____

- | | |
|------------------------|--------------------------|
| 1) North America _____ | 8) Pacific Ocean _____ |
| 2) South America _____ | 9) Atlantic Ocean _____ |
| 3) Europe _____ | 10) Indian Ocean _____ |
| 4) Asia _____ | 11) Arctic Ocean _____ |
| 5) Africa _____ | 12) Southern Ocean _____ |
| 6) Australia _____ | |
| 7) Antarctica _____ | |

- 13) If you were in South America and flew east to Australia which continent would you fly over?
 A. Europe C. Asia
 B. Antarctica D. Africa
- 14) If you were in North America and went west which continent would you end up in?
 A. Asia C. Antarctica
 B. Africa D. Europe
- 15) Which ocean touches Africa's western border?
 A. Atlantic Ocean C. Pacific Ocean
 B. Indian Ocean D. Arctic Ocean
- 16) Which ocean touches Africa's eastern border?
 A. Pacific Ocean C. Indian Ocean
 B. Arctic Ocean D. Atlantic Ocean
- 17) If you were in Europe and went east which continent would you end up in?
 A. Africa C. Asia
 B. North America D. Antarctica



Using the map below, determine which letter represents each continent or ocean.



- | | | | |
|------------------|------------------|--------------------|------------------|
| 1) North America | <u> B </u> | 8) Pacific Ocean | <u> D </u> |
| 2) South America | <u> J </u> | 9) Atlantic Ocean | <u> E </u> |
| 3) Europe | <u> K </u> | 10) Indian Ocean | <u> M </u> |
| 4) Asia | <u> H </u> | 11) Arctic Ocean | <u> L </u> |
| 5) Africa | <u> F </u> | 12) Southern Ocean | <u> G </u> |
| 6) Australia | <u> A </u> | | |
| 7) Antarctica | <u> C </u> | | |

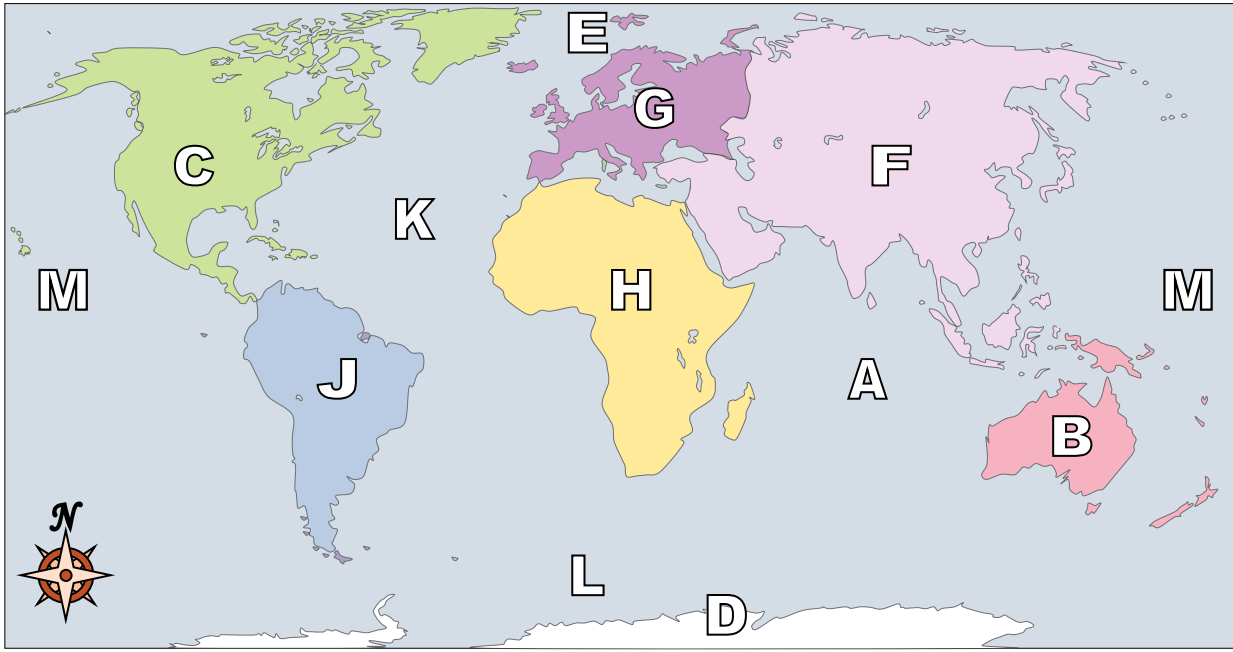
- 13) If you were in South America and flew east to Australia which continent would you fly over?
 A. Europe C. Asia
 B. Antarctica D. Africa
- 14) If you were in North America and went west which continent would you end up in?
 A. Asia C. Antarctica
 B. Africa D. Europe
- 15) Which ocean touches Africa's western border?
 A. Atlantic Ocean C. Pacific Ocean
 B. Indian Ocean D. Arctic Ocean
- 16) Which ocean touches Africa's eastern border?
 A. Pacific Ocean C. Indian Ocean
 B. Arctic Ocean D. Atlantic Ocean
- 17) If you were in Europe and went east which continent would you end up in?
 A. Africa C. Asia
 B. North America D. Antarctica

Answers

1. B
2. J
3. K
4. H
5. F
6. A
7. C
8. D
9. E
10. M
11. L
12. G
13. D
14. A
15. A
16. C
17. C



Using the map below, determine which letter represents each continent or ocean.



Answers

1. _____
2. _____
3. _____
4. _____
5. _____
6. _____
7. _____
8. _____
9. _____
10. _____
11. _____
12. _____
13. _____
14. _____
15. _____
16. _____
17. _____

- | | |
|------------------------|--------------------------|
| 1) North America _____ | 8) Pacific Ocean _____ |
| 2) South America _____ | 9) Atlantic Ocean _____ |
| 3) Europe _____ | 10) Indian Ocean _____ |
| 4) Asia _____ | 11) Arctic Ocean _____ |
| 5) Africa _____ | 12) Southern Ocean _____ |
| 6) Australia _____ | |
| 7) Antarctica _____ | |

- 13) Which ocean touches South America's eastern border?
- | | |
|-------------------|------------------|
| A. Arctic Ocean | C. Pacific Ocean |
| B. Atlantic Ocean | D. Indian Ocean |

- 14) Which continent is touching the eastern border of Europe?
- | | |
|------------------|---------------|
| A. Africa | C. Antarctica |
| B. North America | D. Asia |

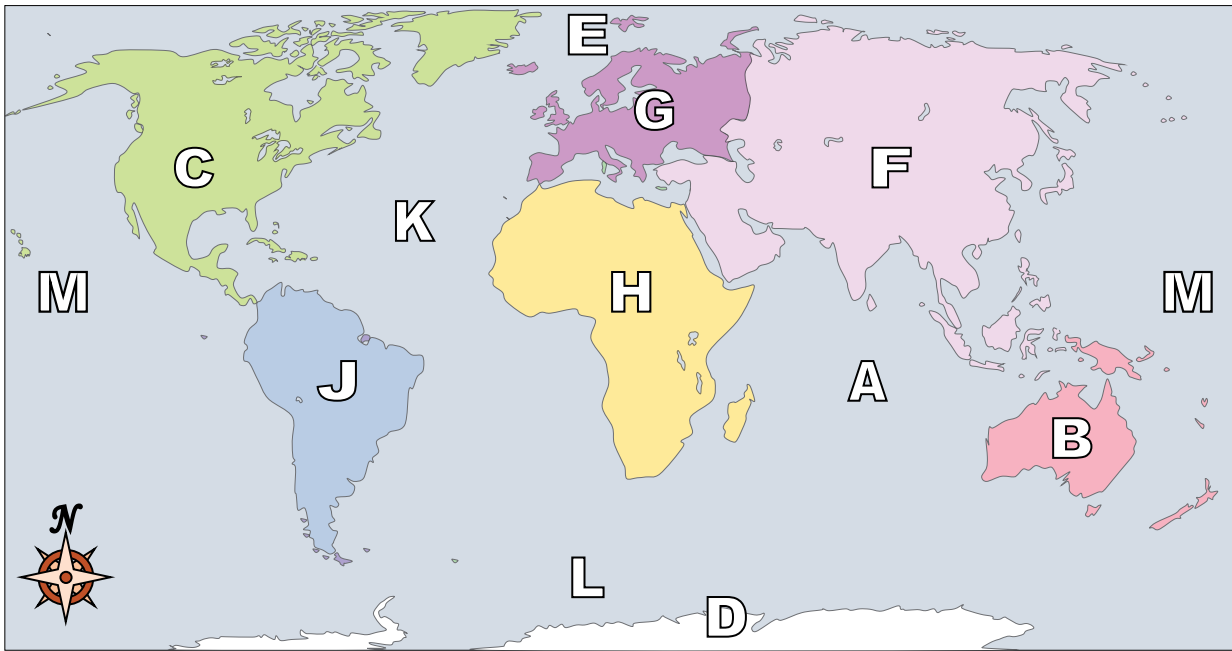
- 15) Which ocean touches South America's western border?
- | | |
|------------------|-------------------|
| A. Arctic Ocean | C. Indian Ocean |
| B. Pacific Ocean | D. Atlantic Ocean |

- 16) Which ocean touches Africa's western border?
- | | |
|------------------|-------------------|
| A. Arctic Ocean | C. Atlantic Ocean |
| B. Pacific Ocean | D. Indian Ocean |

- 17) Which continent is not touching any other continents?
- | | |
|--------------|------------------|
| A. Australia | C. North America |
| B. Europe | D. South America |



Using the map below, determine which letter represents each continent or ocean.



- | | | | |
|------------------|----------|--------------------|----------|
| 1) North America | <u>C</u> | 8) Pacific Ocean | <u>M</u> |
| 2) South America | <u>J</u> | 9) Atlantic Ocean | <u>K</u> |
| 3) Europe | <u>G</u> | 10) Indian Ocean | <u>A</u> |
| 4) Asia | <u>F</u> | 11) Arctic Ocean | <u>E</u> |
| 5) Africa | <u>H</u> | 12) Southern Ocean | <u>L</u> |
| 6) Australia | <u>B</u> | | |
| 7) Antarctica | <u>D</u> | | |

- 13) Which ocean touches South America's eastern border?
 A. Arctic Ocean C. Pacific Ocean
 B. Atlantic Ocean D. Indian Ocean
- 14) Which continent is touching the eastern border of Europe?
 A. Africa C. Antarctica
 B. North America D. Asia
- 15) Which ocean touches South America's western border?
 A. Arctic Ocean C. Indian Ocean
 B. Pacific Ocean D. Atlantic Ocean
- 16) Which ocean touches Africa's western border?
 A. Arctic Ocean C. Atlantic Ocean
 B. Pacific Ocean D. Indian Ocean
- 17) Which continent is not touching any other continents?
 A. Australia C. North America
 B. Europe D. South America

Answers

1. C
2. J
3. G
4. F
5. H
6. B
7. D
8. M
9. K
10. A
11. E
12. L
13. B
14. D
15. B
16. C
17. A